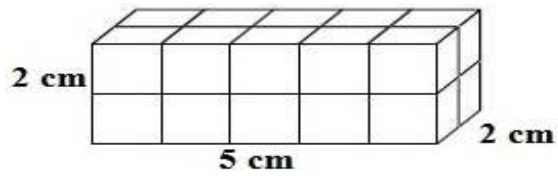


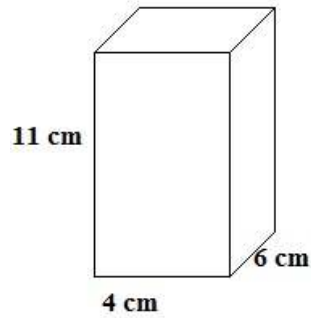
Volume of Rectangular Prisms

worksheet 1

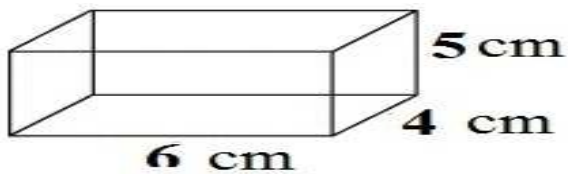
Find the volume of each rectangular prism.



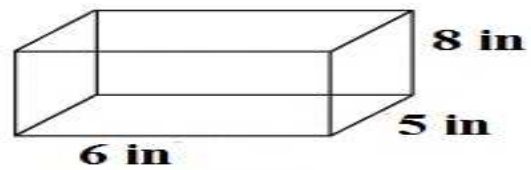
$V =$ _____



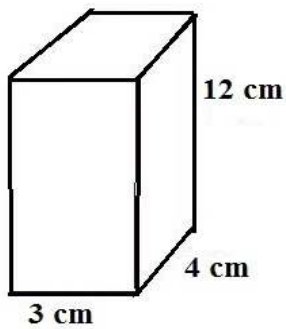
v _____



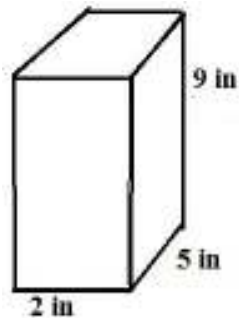
v _____



v _____



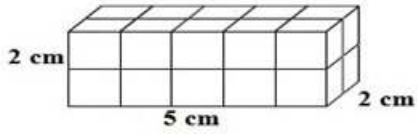
v _____



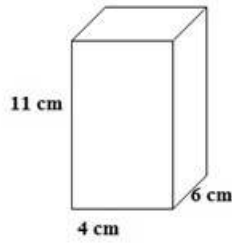
v _____

Volume of Rectangular Prisms

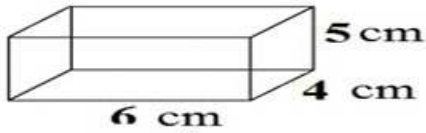
worksheet 1 answers



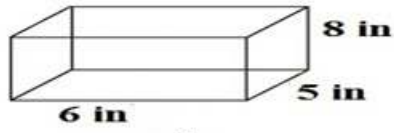
$V = 20 \text{ cm}^3$



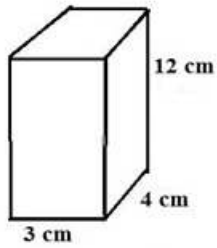
$v = 264 \text{ cm}^3$



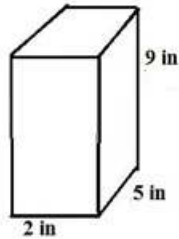
$v = 120 \text{ cm}^3$



$v = 240 \text{ cm}^3$



$v = 144 \text{ cm}^3$



$v = 90 \text{ cm}^3$

www.MathATube.com